

**CANADA: ITS LAND, RESOURCES, & ECONOMY
PRE-TEST**

Directions: In the blank space, write a "T" if the statement is true and an "F" if the statement is false.

- ___ 1. Canada has 11 geographic regions.
- ___ 2. The cordillera is found in central Canada.
- ___ 3. The fjords of western Canada provide shelter for ships and animals.
- ___ 4. Kiwi fruit is grown in Canada.
- ___ 5. The Canadian Rockies are low and have no trees on them.
- ___ 6. No recreational activities take place on the Canadian Rockies because they are so cold.
- ___ 7. The three largest islands in Canada are Baffin, Ellesmere and Victoria.
- ___ 8. Most of northern Canada is covered by one large glacier.
- ___ 9. The Interior Plains is Canada's "breadbasket" region.
- ___ 10. The Canadian Shield is Canada's largest region.
- ___ 11. Vancouver is Canada's second largest city.
- ___ 12. Canada is mostly rocky and has practically no rich soil.
- ___ 13. Water is an abundant natural resource of Canada.
- ___ 14. The Riviere du Laurant is Canada's major inland water route.
- ___ 15. Lumber, pulp and paper are key industries in Canada.
- ___ 16. Two out of every three Canadian workers hold jobs in service industries.
- ___ 17. Oil and natural gas account for twenty-five percent of Canada's mining income.
- ___ 18. There are almost thirteen million head of cattle in Canada.
- ___ 19. Tundra lands are found in the St. Lawrence Lowlands.
- ___ 20. Canada is the world's second largest country.

**CANADA: ITS LAND, RESOURCES, & ECONOMY
LEARNING GOALS**



Canada: Its Land, Resources & Economy

- Name Canada's Seven Regions
- Describe the Major Geographic Features of Each Region
 - Identify the Principal Natural Resources of Canada
 - Explain What Canadians Do to Earn Their Living

**CANADA: ITS LAND, RESOURCES, & ECONOMY
VOCABULARY LIST**

Directions: A list of vocabulary words used in *Canada: Its Land, Resources & Economy* is found below. Write a definition for the words on the provided spaces.

Abundant _____

Arctic _____

Assemble _____

Basin _____

Bay _____

Canola _____

Component _____

Cordillera _____

Financial _____

Fjord _____

Glacier _____

Grasp _____

Harbor _____

Highland _____

High-tech _____

Hydroelectric _____

Immensity _____

Inlet _____

Laker _____

Legal _____

Lowland _____

CANADA: ITS LAND, RESOURCES, & ECONOMY
VOCABULARY LIST (continued)

Majestic _____

Milling _____

Natural resource _____

Peaks _____

Petroleum _____

Plains _____

Plateau _____

Ply _____

Plywood _____

Potash _____

Prawn _____

Pulp _____

Recreational _____

Refining _____

Revenue _____

Stunted _____

Swamp _____

Tundra _____

Varnish _____

**CANADA: ITS LAND, RESOURCES, & ECONOMY
VIEWER'S CONCEPT GUIDE**

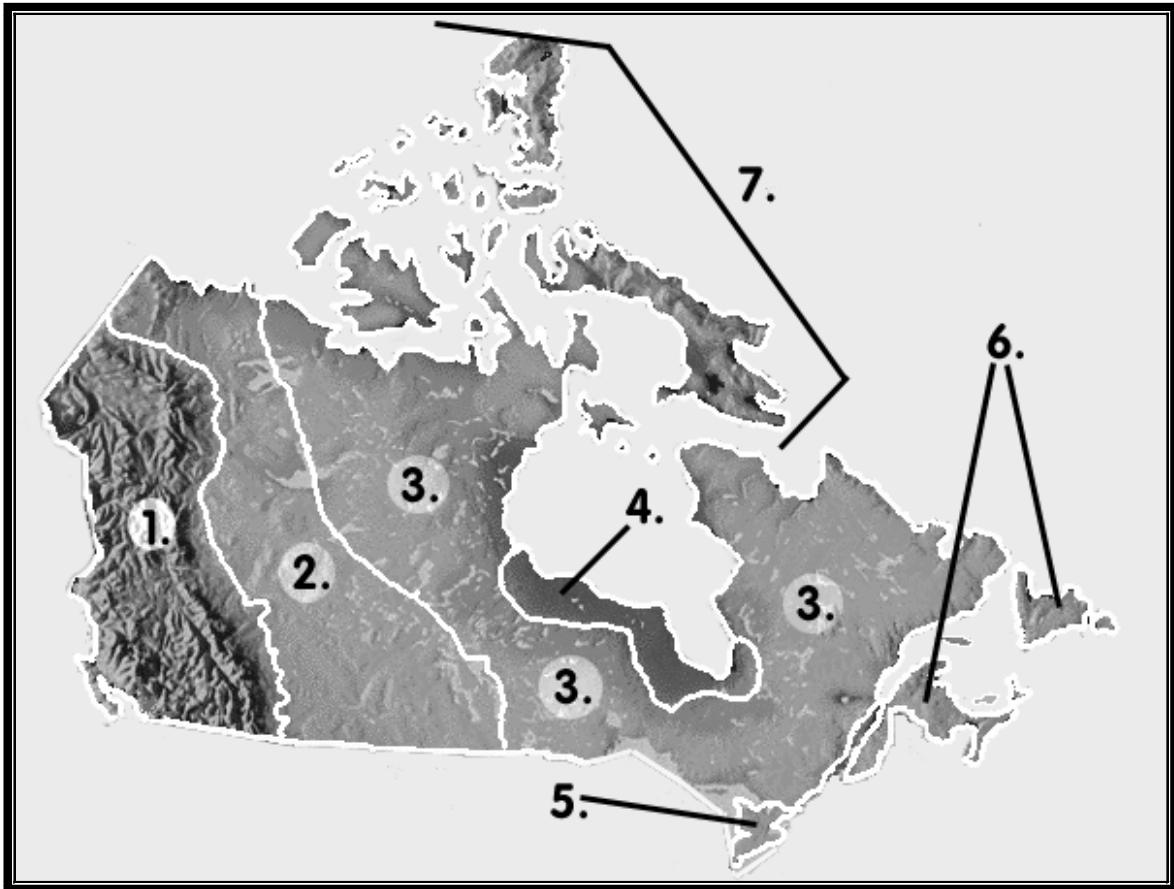
Directions: Fill in the blanks with the correct information.

1. Canada is the world's _____ largest country.
2. Canada's seven land regions are _____, _____, _____, _____, _____, _____ and _____.
3. The two mountain ranges of the cordillera are the _____ and the _____.
4. Glaciers and _____ cover much of the Arctic Islands.
5. The Interior Plains are known as Canada's _____ region.
6. The Canadian Shield forms a vast _____ around Hudson Bay.
7. The Hudson Bay lowlands is covered by flat _____ and stunted trees.
8. Most Canadians live in the _____.
9. The Appalachian Highlands are known for its _____ with many small inlets and bays.
10. Five major natural resources of Canada are _____, _____, _____, _____ and _____.
11. More than three out of five Canadians have _____ jobs.
12. Three forestry products of Canada are _____, _____ and _____.
13. Five agricultural products of Canada are _____, _____, _____, _____, _____.

CANADA: ITS LAND, RESOURCES, & ECONOMY

CANADA'S REGIONS

Directions: On the spaces below the map, write in the correct name of the region.

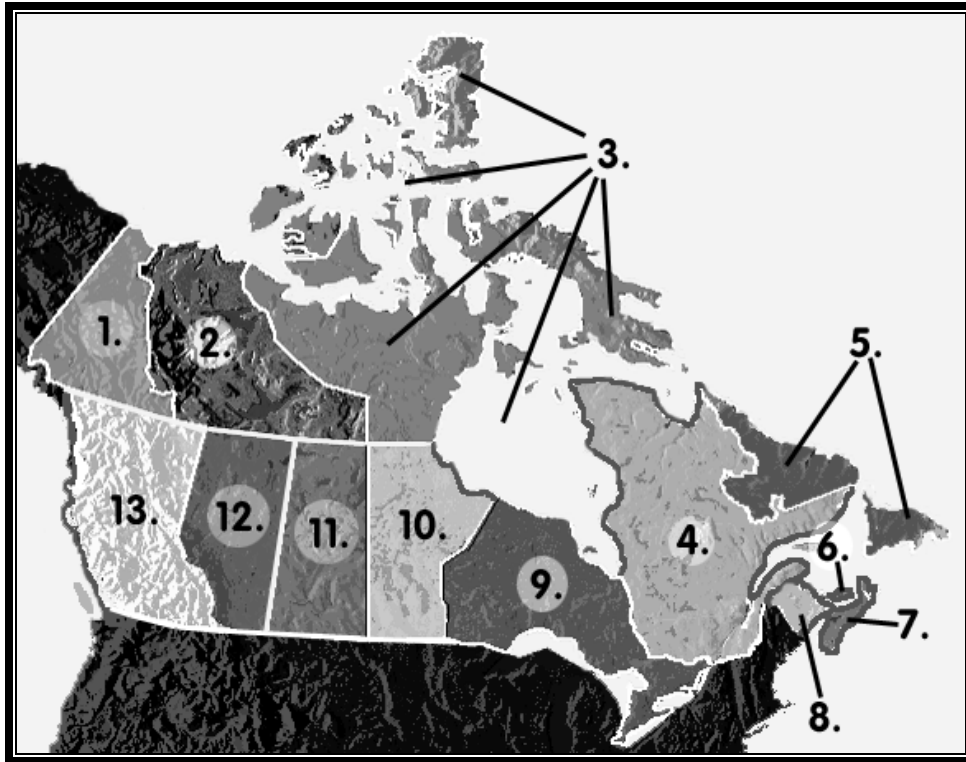


1. _____
2. _____
3. _____
4. _____
5. _____
6. _____
7. _____

CANADA: ITS LAND, RESOURCES, & ECONOMY

CANADA'S PROVINCES AND TERRITORIES

Directions: In the spaces below, write in the correct name of the province or territory.



1. _____
2. _____
3. _____
4. _____
5. _____
6. _____
7. _____
8. _____
9. _____
10. _____
11. _____
12. _____
13. _____

CANADA: ITS LAND, RESOURCES, & ECONOMY POST-TEST

Part I

Directions: Place a "T" in the space next to the statement if it is true, and an "F" if it is false.

- ___ 1. The Cordillera is found in eastern Canada.
- ___ 2. Apples are grown in the St. Lawrence Lowlands.
- ___ 3. The Arctic Islands are a major recreational area.
- ___ 4. Baffin is the world's third largest island.
- ___ 5. The Appalachian Highlands is Canada's smallest region.
- ___ 6. Three natural resources of Canada are oil, natural gas and water.
- ___ 7. Montreal is Canada's largest city.
- ___ 8. The Canadian region with the largest population is the St. Lawrence Lowlands.
- ___ 9. Most Canadians work in service occupations.
- ___ 10. Diamonds are a mineral resource in Canada.

Part II

Directions: Match the region to one of its major geographic features.

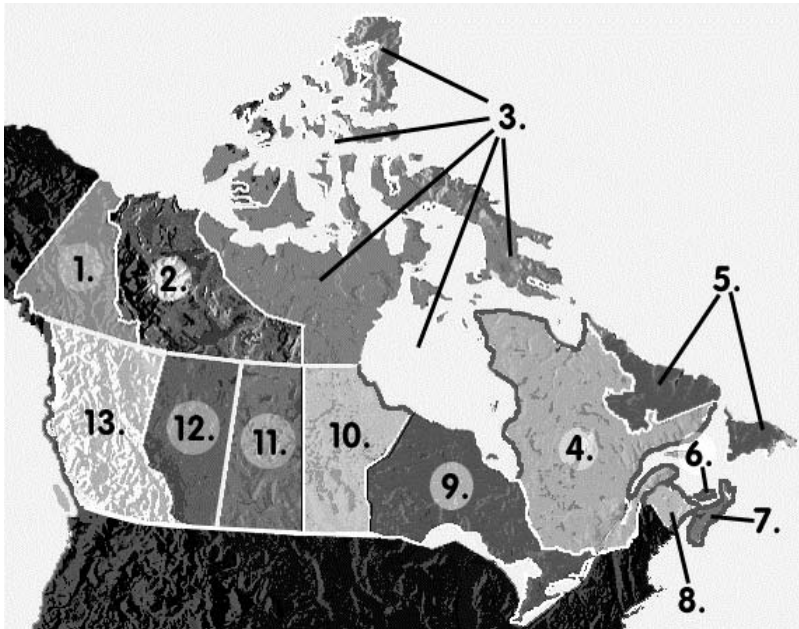
- | <u>Region</u> | <u>Major Geographic Feature</u> |
|------------------------------|---------------------------------|
| 1. ___ Cordillera | a. Tundra |
| 2. ___ Canadian Shield | b. Rocky Mountains |
| 3. ___ Arctic Islands | c. Rocky shoreline |
| 4. ___ Appalachian Highlands | d. Flatlands |
| 5. ___ Interior Plains | e. Ancient rock |

CANADA: ITS LAND, RESOURCES, & ECONOMY

POST-TEST PAGE 2

Part III

Directions: Below the map, write the name of the province or territory in the spaces provided.



- | | | |
|-----------|-----------|-----------|
| 1. _____ | 2. _____ | 3. _____ |
| 4. _____ | 5. _____ | 6. _____ |
| 7. _____ | 8. _____ | 9. _____ |
| 10. _____ | 11. _____ | 12. _____ |
| 13. _____ | | |

Part IV

Directions: Circle the letter next to the word or phrase that most accurately completes the sentence.

1. The fjords of western Canada provide
 - a. protection for water craft.
 - b. fruit and vegetables.
 - c. protection for animals.
 - d. a. and c.

CANADA: ITS LAND, RESOURCES, & ECONOMY
POST-TEST PAGE 3

2. The landforms that lie between the two mountain ranges of the cordillera are
 - a. desert and valley.
 - b. plateau and hills.
 - c. basin and lowland.
 - d. none of the above.

3. The three largest Arctic islands of Canada are
 - a. Ellesmere, St. John's and Baffin.
 - b. Baffin, Prince Edward and Ellesmere.
 - c. Victoria, Iceland and Greenland.
 - d. Baffin, Ellesmere and Victoria.

4. One third of Canada's agricultural output comes from
 - a. Prince Edward Island.
 - b. Newfoundland and Labrador.
 - c. the St. Lawrence Lowlands.
 - d. none of the above.

5. Most of Canada's mining income comes from
 - a. petroleum and natural gas.
 - b. iron ore and zinc.
 - c. zinc and potash.
 - d. nickel and gold.

6. Two out of three Canadian workers hold jobs in
 - a. manufacturing.
 - b. mining.
 - c. service industries.
 - d. agricultural processing.

7. "Lakers"
 - a. can be found on the St. Lawrence Seaway.
 - b. are a game fish caught on the Great Lakes.
 - c. are giant salmon bred in British Columbia.
 - d. is the name of Canada's national hockey team.

8. Canada's lumber industry makes
 - a. newsprint.
 - b. plywood.
 - c. paper.
 - d. all of the above.